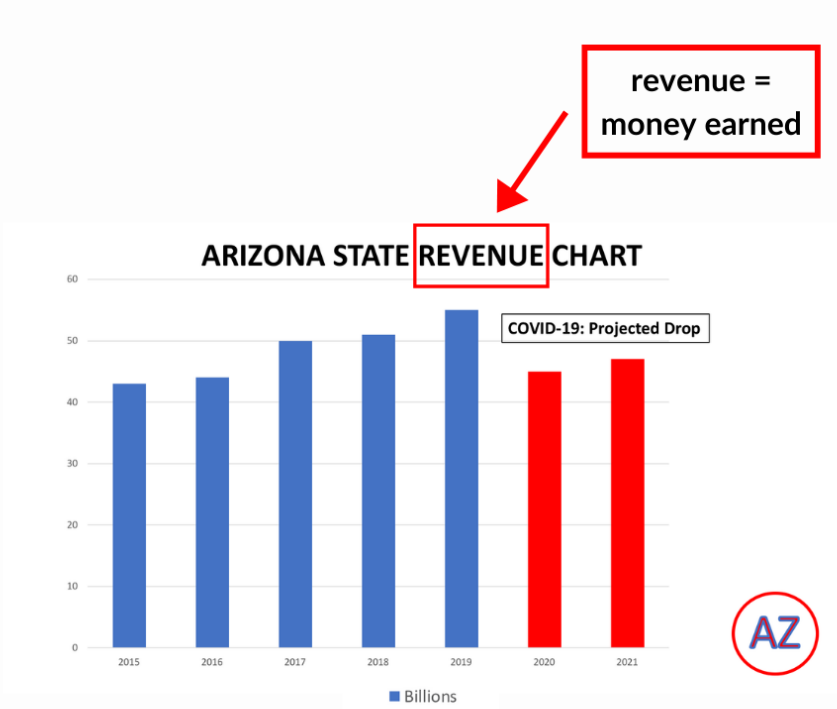


Lives in Balance: Annotated Images Analysis

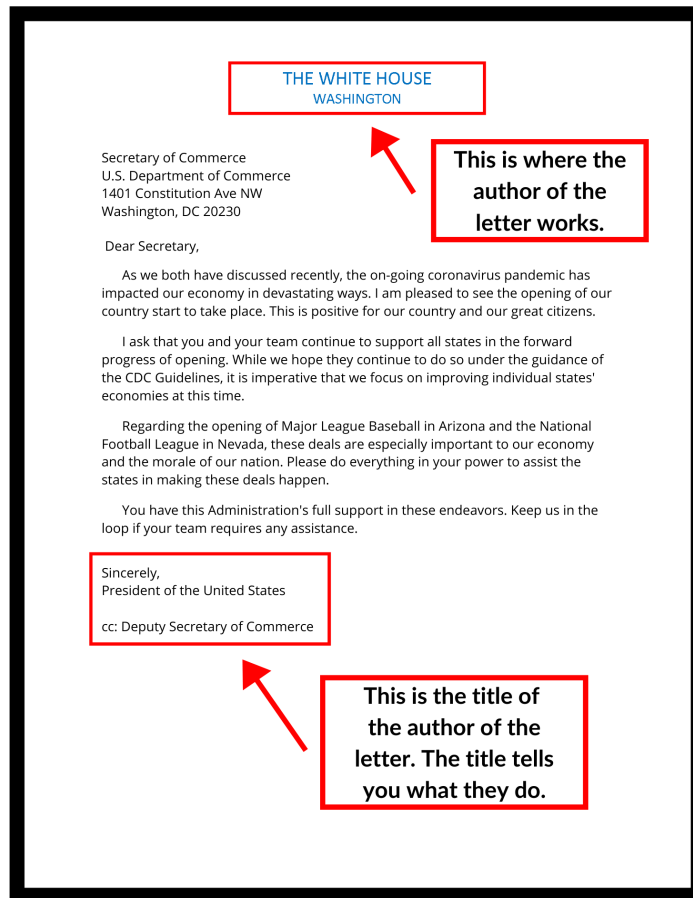


This graphic contains fictional data and is intended for educational purposes only.

Using the chart above, answer the following questions:

1.) What does revenue mean?

2.) Explain how COVID-19 has changed Arizona’s state budget.



This graphic contains fictional data and is intended for educational purposes only.

Using the memo above, answer the following questions:

1.) To whom is the memo being sent?

2.) Give a brief summary of the memo.

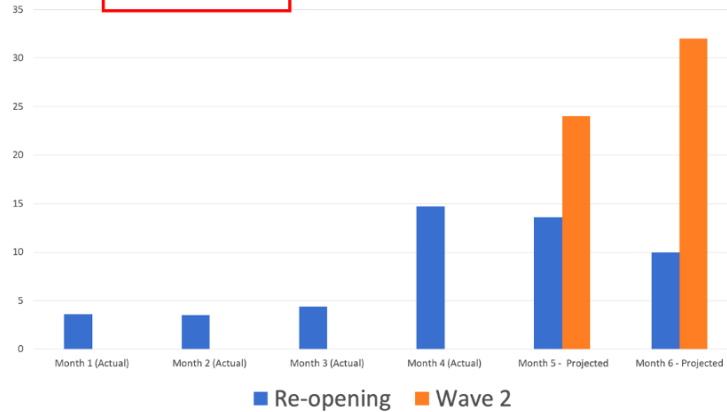


Using the map above, answer the following question:

1.) What four states do the Navajo Nation reside in?

Unemployment Rate = the percentage of people looking for work who are unable to find it

USA: Unemployment Rate - Reopening vs. Virus Impact (Projection for Wave 2)



Note: Rates shown are a percentage of the labor force. Data refer to place of residence. Estimates for the current month are subject to revision the following month.

This graphic contains fictional data and is intended for educational purposes only.

Using the chart above, answer the following questions:

1.) In your own words, what do you think the term “unemployment rate” means?

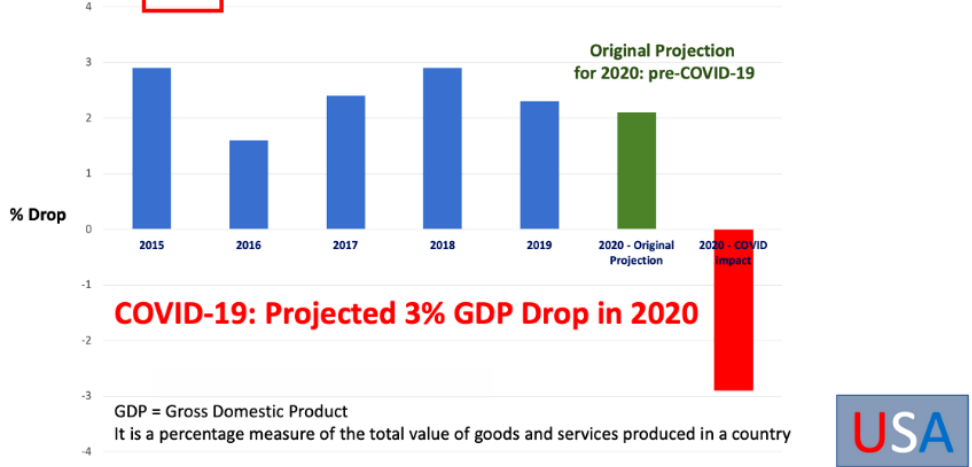
2.) How can you tell if the unemployment rate is going up or down?

3) Do you think knowing the unemployment rate is important? Why or why not?

GDP = Gross Domestic Product

The GDP is a measurement of how healthy our economy is. If the GDP goes up, that's a good sign!

USA GDP GROWTH – SHARP DROP DUE TO PANDEMIC



This graphic contains fictional data and is intended for educational purposes only.

Using the chart above, answering the following questions:

1.) In your own words, what does GDP mean?

2.) How has the US GDP been affected by COVID-19?
